






# Shapes in our neighbourhood


<p><b>Square</b></p>	<p><b>Draw the shape:</b></p> 	<p><b>Where was the shape?</b></p>
----------------------	---	------------------------------------


<p><b>Triangle</b></p>	<p><b>Draw the shape:</b></p> 	<p><b>Where was the shape?</b></p>
------------------------	---	------------------------------------


<p><b>Circle</b></p>	<p><b>Draw the shape:</b></p> 	<p><b>Where was the shape?</b></p>
----------------------	---	------------------------------------


<b>Rectangle</b>	<b>Draw the shape:</b> 	<b>Where was the shape?</b>
------------------	---	-----------------------------


<b>Oval / Ellipse</b>	<b>Draw the shape:</b> 	<b>Where was the shape?</b>
-----------------------	---	-----------------------------


<b>Star</b>	<b>Draw the shape:</b> 	<b>Where was the shape?</b>
-------------	---	-----------------------------

<b>Crescent</b>	<b>Draw the shape:</b> 	<b>Where was the shape?</b>
-----------------	---	-----------------------------

<p><b>Octagon</b></p>	<p><b>Draw the shape:</b></p> 	<p><b>Where was the shape?</b></p> <p><b>How many sides does an Octagon have?</b></p>
-----------------------	---	---

<p><b>Semi-circle / Half-circle</b></p>	<p><b>Draw the shape:</b></p> 	<p><b>Where was the shape?</b></p>
---	---	------------------------------------

<p><b>Diamond</b></p>	<p><b>Draw the shape:</b></p> 	<p><b>Where was the shape?</b></p>
-----------------------	---	------------------------------------

<p><b>Hexagon</b></p>	<p><b>Draw the shape:</b></p> 	<p><b>Where was the shape?</b></p> <p><b>How many sides does a Hexagon have?</b></p>
-----------------------	---	--

<b>Cone</b>	<b>What shape is on the bottom of the cone?</b>	<b>Where was the shape?</b>
-------------	---	-----------------------------

<b>Cube / Box</b>	<b>What shape is the top of the cube?</b> <b>How many sides does a cube have?</b>	<b>Where was the shape?</b>
-------------------	--	-----------------------------

<b>Sphere / Ball</b>	<b>How many spheres did you see?</b>	<b>Where was the shape?</b>
----------------------	--------------------------------------	-----------------------------

<b>Cylinder</b>	<b>What shapes are on each end?</b>	<b>Where was the shape?</b>
-----------------	-------------------------------------	-----------------------------